

शीतकालीन गृहकार्य

कक्षा - पाँच

1. निम्नलिखित अनुच्छेद में संज्ञा शब्दों को रेखांकित कीजिए व उन्हें उपयुक्त शीर्षक के नीचे लिखिए।

गणतंत्र दिवस का मुख्य समारोह देश की राजधानी दिल्ली में होता है। राजपथ पर राष्ट्रपति तीनों सेनाओं की सलामी लेते हैं। सेना के जवान मार्च करते हुए लाल किले तक जाते हैं। राजपथ के दोनों ओर हजारों लोगों की भीड़, इस भव्य कार्यक्रम का आनंद लेने आती है। गणतंत्र दिवस का पर्व हमें उन शहीदों की याद दिलाता है जिन्होंने देश की स्वतंत्रता के लिए अपने प्राणों का बलिदान कर दिया।

व्यक्तिवाचक	जातिवाचक	भाववाचक	समूहवाचक
_____	_____	_____	_____
_____	_____	_____	_____
_____	_____	_____	_____

2. निम्नलिखित शब्दों से भाववाचक संज्ञाएँ बनाइए।

क. मम _____

ख. बूढ़ा _____

ग. ठग _____

घ. चढ़ _____

3. द्रव्यवाचक संज्ञा व समूहवाचक संज्ञा के तीन-तीन उदाहरण दीजिए।

द्रव्यवाचक संज्ञा - _____

समूहवाचक संज्ञा - _____

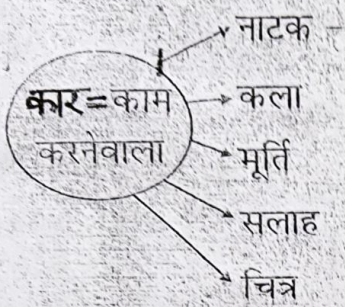
प्रश्न गणतंत्र दिवस क्यों मनाया जाता है?

उत्तर _____

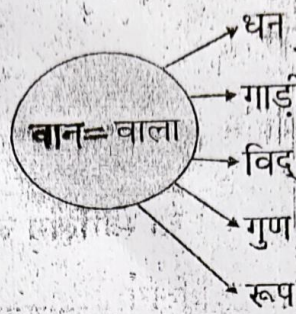
प्रश्न गणतंत्र दिवस पर राष्ट्रपति किसको और कहां पर सलामी देते हैं?

उत्तर _____

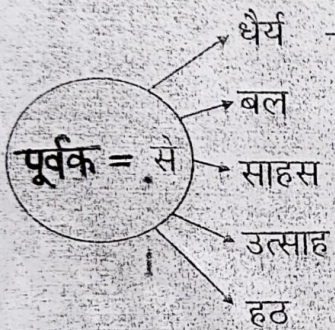
4. गोले में लिखे शब्दांश का अर्थ जानकर उसे शब्द के साथ जोड़कर, नया शब्द बनाइए।



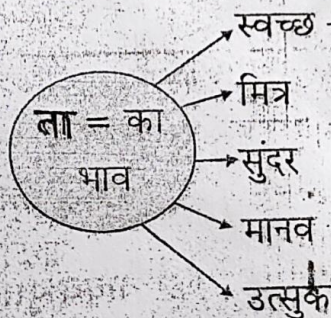
नाटककार



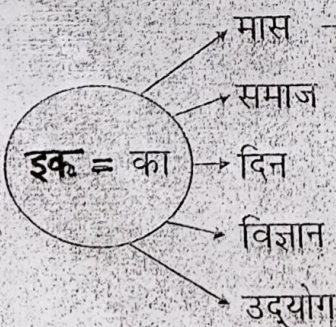
धनवान



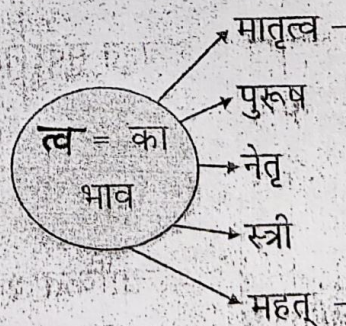
धैर्यपूर्वक



स्वच्छता



मासिक



मातृत्व

• काँपी में कराए गए कार्यों का नियमित अभ्यास करें।

• प्रतिदिन एक कहानी पढ़ें और कहानी में आए गए शब्दों की सूची बनाएँ।

Jingle Bell School
Holiday Homework
Class - V

Worksheet 2

Glossary

Name:

Date:

Class:

Choose the meanings of the following words.

a. ancient

- i. fossilized
- ii. aged
- iii. ancient
- iv. gray

b. oblivious

- i. absentminded
- ii. unaware
- iii. attentive
- iv. conscious

c. scuttled

- i. ran with quick, hasty steps
- ii. walked leisurely
- iii. jumped
- iv. shoved

d. bulbous

- i. fat, bulging and round; shaped like a bulb
- ii. yellow like a bulb
- iii. sharp and pointed
- iv. red coloured

e. autobiography

- i. the story of someone's life
- ii. a story of person's life written from the accounts of other people
- iii. an account of a person's life written by another person
- iv. an account of a person's life written by that person

f. enraptured

- i. surprised
- ii. enjoyed
- iii. admired
- iv. extremely pleased by

The main incident

The World in a Wall

Repercussions of the incident

The funniest part of the story is when

I found _____ to be the most interesting character because _____

What a views!

In 1953 Edmund Hillary and Tenzing Norgay were the first people to reach the top of Mount Everest. It was six-thirty in the morning. Five hours later, after a slow, hard climb through the snow and ice, the two men reached the highest place in the world. The view was incredible. All around them, the men could see the Himalayan Mountains. They had to look down to see the white tops of some of the highest mountains in the world.



Many people dream about going to the top of Mount Everest. Climbing Mount Everest, though, is very dangerous. Even in the warmest month, July, the average temperature at the top of the mountain is about 19°C . Very strong winds and storms can start suddenly. And avalanches of snow and ice often fall down the mountain, buying everything in their path.

Around two hundred people have died on the mountain, but every year people continue to come from all over the world to climb it. Some want to see the view Norgay and Hillary saw. Most, though, just want to climb the highest mountain on earth.

1) Answer these questions

- a. In what year did the first people reach the top of Mount Everest?
- b. What were their names?
- c. What did they see from the top?
- d. What is the average temperature at the top of Mount Everest in July?
- e. Why do so many people want to climb Mount Everest?
- f. How many people have died on the Mountain?

2) Complete each sentence with the correct word.

- a. Our hotel room had a wonderful _____ of the city.
- b. The _____ age of soldiers who fought in Iraq was nineteen.
- c. Jaipur is one of the hottest cities in India. In summer the _____ can reach over 40°C .
- d. An _____ is a huge amount of ice and snow that falls down a mountain.

3) Underline all the subjects in the first paragraph.

4) Underline the phrases in these sentences.

- a. All around them the men could see the Himalayan Mountains.
- b. They had to look down to see the white tops of some of the highest mountains in the world.

Editing and Proofing a Paragraph



Below is a paragraph that is full of errors. There may be spelling, punctuation, capitalization, or grammar errors. Rewrite the paragraph correcting all the errors.

Music is an art forme that apears in evry culture in the world. For thousands of years its been an important part of the human experiance. Music has been use as enertainment as a way to pass on storys, and as a form of artestic espression. Each person may have their own perference in the type of Music they like but most people will like Music in some form. Music has even been used by therapits to help patience with mental and phisical health issues and and acheived good results.

Subject: Science

Worksheet No.

Topic: Simple Machines


STD V

Name: _____ Sec. _____

Roll No. _____


I Complete the sentences with appropriate words.

- The force applied to lift the load using a lever is called _____
- The point at which a lever is supported is called _____
- A wheelbarrow is a lever in which the _____ is in between the _____ and the _____
- In the lever of the third type the _____ is in the middle.



II Mark the following statements as True or False.

- The pulley changes the direction of force. _____
- A pair of tongs is an example of third class lever. _____
- More force is needed to insert a screw into wood than a nail. _____



III Tick the correct answers.

- Which of the following is not a function of simple machines?
 - Make our work convenient
 - Enable us lift more load with less force.
 - Make our work easier
 - Enable us make the measurements correctly.



- A screw is a modified form of

a. a lever	b. an inclined plane	c. a pulley	d. a wheel
------------	----------------------	-------------	------------

IV Identify the kind of simple machine.

- A machine in which a downward effort is used to lift the load up. _____
- A machine used to lift a heavy load using less effort. _____

V Name the simple machine used in a :


a. spoon _____

b. screw jack _____

VI Give reasons. Most hospitals have ramps.

VII Look at the picture shown and answer the given questions.

a. Name the simple machine to be used in unloading the box from the vehicle.



b. What is the function of the machine to be used in unloading?

c. Mention two other examples of such a machine.

1. _____ 2. _____

VIII Answer the following questions.

1. What is a lever?

2. A wheel is not a simple machine. What will you do to make it into a simple machine?
What is such a machine called?

3. Name two complicated machines that can be taken to be made up of a combination of simple machines. a. _____ b. _____

Winter break

Holiday Homework

All the question to be done in the copy

Q1) Compare the given fractions

a) $\frac{7}{9}$ $\frac{7}{12}$

b) $1\frac{6}{11}$ $2\frac{1}{2}$

c) $\frac{21}{19}$ $\frac{73}{81}$

d) $\frac{13}{13}$ 1

e) $\frac{5}{16}$ $\frac{9}{16}$

f) $3\frac{1}{4}$ 2

Q2. Solve pictorially (Graph copy)

a) $4\frac{1}{3} - 2\frac{2}{3}$

b) $1\frac{1}{4} + \frac{7}{4}$

c) $1\frac{2}{3} \times 4$

Q3. Find (only T.P.)

a) $\frac{4}{7}$ of 63 flowers = _____ flowers

b) $\frac{3}{5}$ of 15,000 = _____

Q4. Solve (only T.P)

a) $\frac{5}{9} + 2\frac{1}{6} + \frac{7}{12}$

b) $5\frac{3}{8} - 2\frac{5}{6}$

c) $\frac{21}{60} \times \frac{24}{45} \times \frac{18}{63}$

5. Find the LCM and HCF of 18, 24 and 42.

Q6. Statement Sum

- a. Lalit brought $8\frac{1}{6}$ m of cloth from the market. He made a car cover using $3\frac{1}{4}$ m cloth and a mattress cover using $2\frac{1}{8}$ m cloth. How much cloth is left with him?
- b. Priyanka had 54,000 with her. She spent $\frac{4}{7}$ of the money to buy a mobile phone and with the rest of the money she bought furniture. How much money she used to buy furniture?

Q7) Do page number 68, 69, 70, 134, 185 and 136 of your Math Magic (in the book)